

Name: _____

Date: _____

Class: _____

Chapter 13: People's Republic of China

Vocabulary: Know the Terms

Directions: Define the given term in your own words.

1. monsoon season

2. Three Gorges Dam

3. acid rain

4. Han

5. Mandarin

6. Qing Dynasty

7. Nationalist Party

8. Chinese Communist Party

Continued on next page.



9. Long March

Directions: Write a sentence using each term in context.

10. head of state

11. head of government

12. premier

13. president

Directions: Draw an image or symbol that represents the term.

monsoon season	human rights	cyber security	market economy
acid rain	Red Guards	communist	Long March



Name: _____

Date: _____

Class: _____

Chapter 13: People's Republic of China

Section 1: The Geography of China

Section 1: Physical Geography and Environment

Directions: Complete the chart below with information from the text.

Location and Size of China	
Physical Features of China	
Climate of China	
Natural Resources of China	
Where People Live in China	




Directions: Write a complete paragraph describing the physical geography of China.

Continued on next page.




Directions: Complete the graphic organizer with details from the textbook.

Environmental Issues of China

	<p>Air Pollution</p> <ul style="list-style-type: none">• Facts:
	<p>Water Pollution</p> <ul style="list-style-type: none">• Facts:
	<p>Flooding</p> <ul style="list-style-type: none">• Facts:

Directions: In the space below, draw a public awareness poster for Air Pollution in Shanghai.



Chapter 13: People's Republic of China**Section 2: A Brief History of China****Section 2: Chinese History**

Directions: For each question, write the letter of the BEST response on the line beside each question.

- _____ 1. What type of government did China have for many thousands of years?
- absolute monarchy
 - democracy
 - military dictatorship
 - republic
- _____ 2. What was the last dynasty of China?
- Han
 - Qing
 - Shang
 - Xia
- _____ 3. In 1921, a group of Chinese men led by Mao Zedong formed which new political party?
- Chinese Capitalist Party
 - Chinese Communist Party
 - People's Republic Party
 - People's Nationalist Party
- _____ 4. What was the result of the communist influence in China?
- A civil war was fought.
 - A nation was formed.
 - Independence was declared.
 - A capitalist state was formed.
- _____ 5. What was the name of the Communist Party's army?
- Chinese People's Army
 - Resistance Army
 - Red Army
 - White Army
- _____ 6. What tragic event that killed 20 million people was brought on by a Mao program?
- Cultural Rebellion
 - Communist Rebellion
 - Great Leap Forward
 - Socialist Rebellion



Name: _____

Date: _____

Class: _____

Chapter 13: People's Republic of China

Section 3: The Government of China

Section 3: Government and Voting

Directions: Complete the chart with information from the text.

Type of Government	Distribution of Power: Role of Communist Party:
Executive Branch	Head of State: Head of Government:
Legislative Branch	National People's Congress: Who can be elected?
Judicial Branch	Who is really in control of the judicial branch? How is the Supreme People's Court divided?
Voting Rights	Who can vote? Who can be elected? Is this democratic?

Directions: Write a complete paragraph summarizing the challenges facing the government of China.



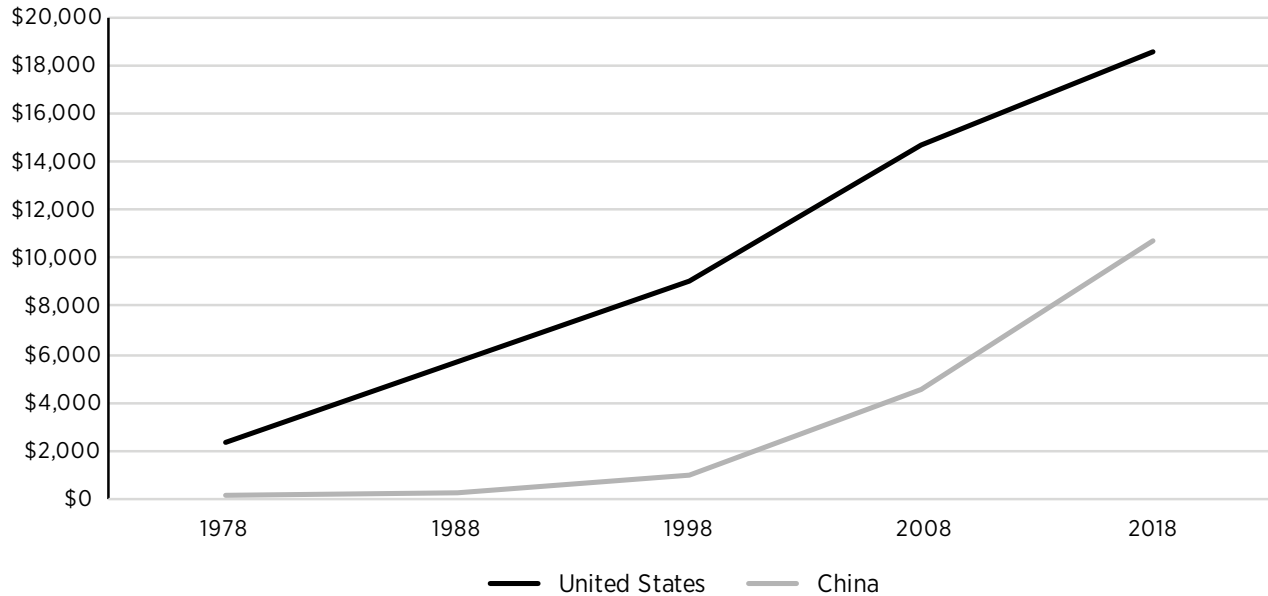
Chapter 13: People's Republic of China

Section 4: The Economy of China

Section 4: China's GDP and Economy

Directions: Use the line graph to answer the questions.

Gross Domestic Product (Billions of Dollars)



- In which year did China's GDP begin to grow and close the gap with the United States? _____
- What was the GDP of the United States in 2016? _____ China in 2016? _____
- How would you describe China's GDP from 1978 thru 1988?

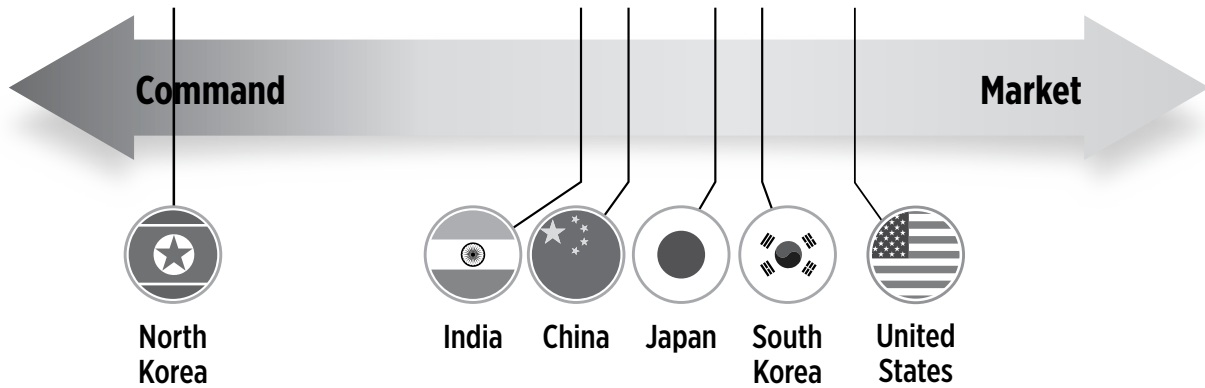
- How much more was the United States' GDP than that of China in 2008?

- What decade would you consider the greatest for growth for China? _____

Continued on next page.



Economic Systems in Asia



Directions: Use the economic continuum to answer the questions below.

1. Why might China be located more to the left than the United States on the continuum?

2. What does the chart suggest about the economic systems of Asia versus that of the United States?

3. What actions could China take that would move it to the right on the continuum?

4. What actions could China take that would move it to the left on the continuum?

Directions: Write one or two complete sentences summarizing the economic system of China.



Chapter 13: People's Republic of China**Quick Review**

Directions: For each question, write the letter of the BEST response on the line beside each question.

- _____ 1. Which physical feature of China separates it from India?
a. Gobi Desert
b. Himalayan Mountains
c. Yellow River
d. South China Sea
- _____ 2. What best describes the population of China?
a. the largest on Earth
b. the second largest on Earth
c. the third largest on Earth
d. the fourth largest on Earth
- _____ 3. What is considered a major issue for industrial cities in China?
a. air pollution
b. noise pollution
c. light pollution
d. none of the above
- _____ 4. What was the government system of China for thousands of years?
a. absolute monarchy
b. communist state
c. democratic republic
d. none of the above
- _____ 5. What was the last dynasty of China?
a. Chang
b. Han
c. Qing
d. Xi
- _____ 6. Which was an early Chinese philosophy that still has an influence on Chinese culture today?
a. Buddhism
b. Confucianism
c. Daoism
d. Hinduism

Continued on next page.



Directions: Write three complete paragraphs on the topics below.

- What was the influence of Mao Zedong on China and what system did he bring to China?
- What is the government system of China and why do many refuse to call it democratic?
- What has been the recent trend, since 1988, for China’s economy as its leaders institute more capitalism?

